

Week 11 Answers

Session Two:

Fractions and Ordering Answers

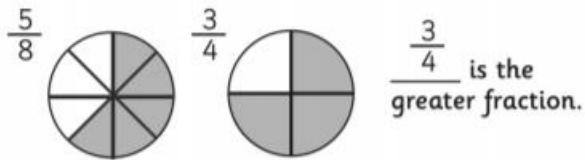
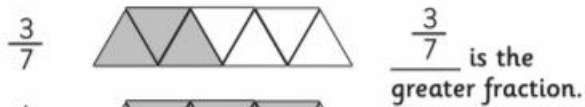
Order these fractions from the smallest.

$$\frac{3}{6} \quad \frac{1}{6} \quad \frac{5}{6} \quad \frac{2}{6} \quad \frac{4}{6} \quad \left(\frac{1}{6} \quad \frac{2}{6} \quad \frac{3}{6} \quad \frac{4}{6} \quad \frac{5}{6} \right)$$

Order these fractions from the biggest.

$$\frac{4}{12} \quad \frac{6}{12} \quad \frac{8}{12} \quad \frac{10}{12} \quad \frac{11}{12} \quad \left(\frac{11}{12} \quad \frac{10}{12} \quad \frac{8}{12} \quad \frac{6}{12} \quad \frac{4}{12} \right)$$

Colour the boxes according to its fraction. Which fraction is greater?



Fractions and Ordering Answers


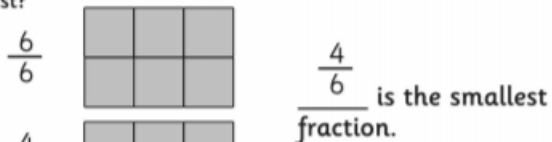
Order these fractions from the smallest.

$$\frac{7}{9} \quad \frac{3}{9} \quad \frac{9}{9} \quad \frac{1}{9} \quad \frac{4}{9} \quad \left(\frac{1}{9} \quad \frac{3}{9} \quad \frac{4}{9} \quad \frac{7}{9} \quad \frac{9}{9} \right)$$

Order these fractions from the biggest.

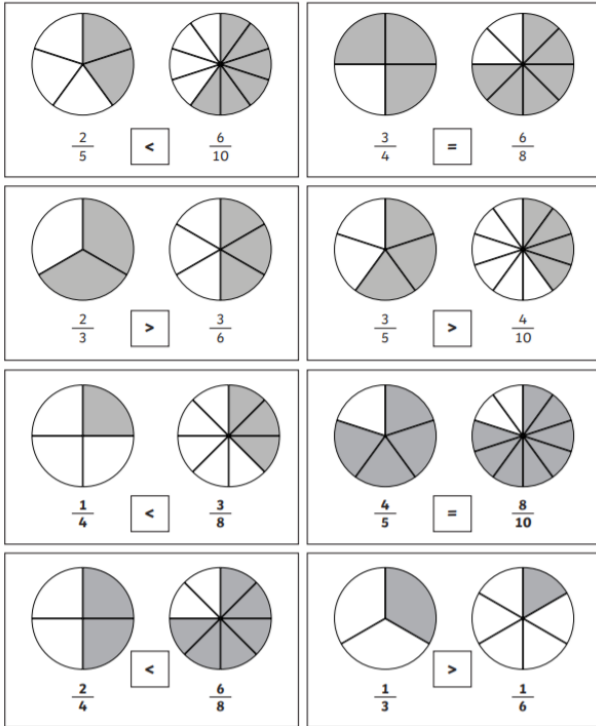
$$\frac{4}{4} \quad \frac{1}{2} \quad \frac{2}{3} \quad \frac{2}{4} \quad \left(\frac{4}{4} \quad \frac{2}{3} \quad \frac{2}{4} \quad \frac{1}{2} \right)$$

Colour the boxes according to its fraction. Which fraction is smallest?

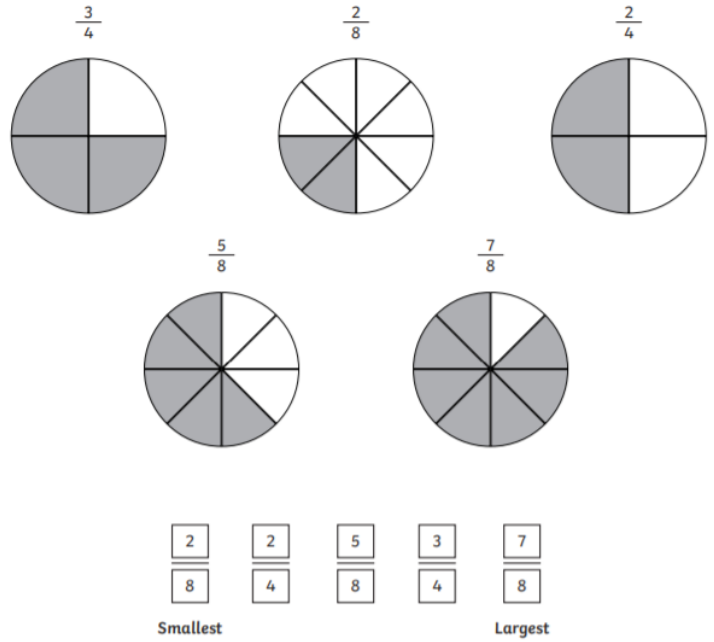


Session Three:

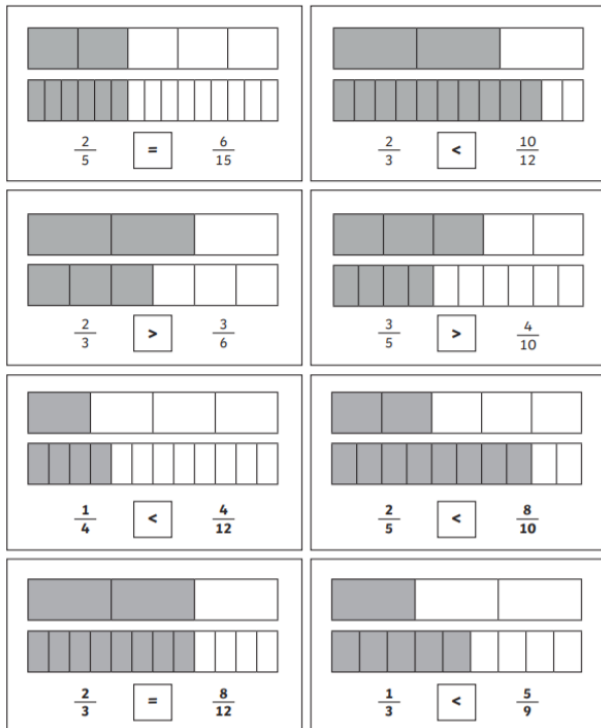
Comparing and Ordering Fractions Answers



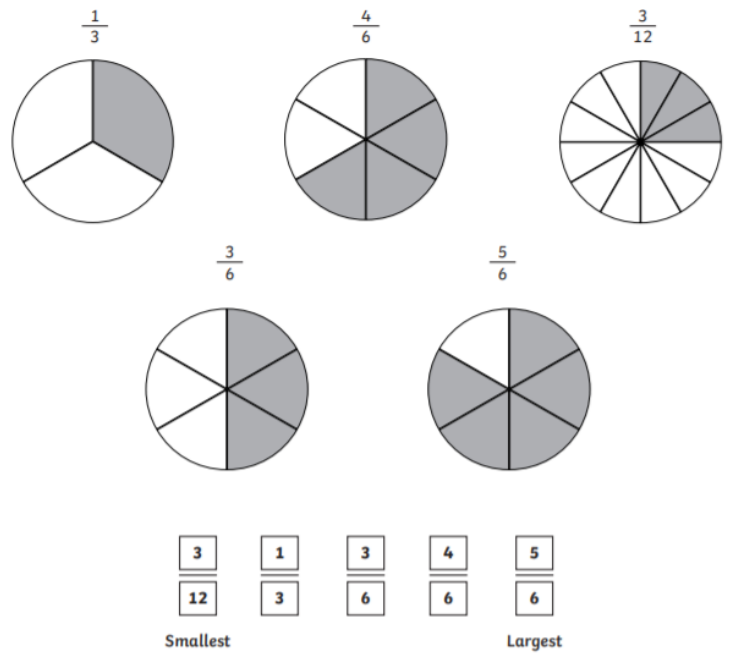
Colour in the circles to represent each fraction and then put each fraction in order from smallest to largest.



Comparing and Ordering Fractions Answers



Colour in the circles to represent each fraction and then put each fraction in order from smallest to largest.



Session Four:

Comparing and Ordering Fractions

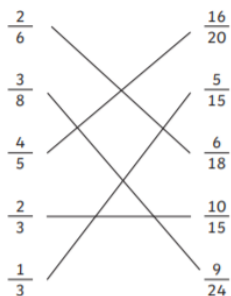
Answers

$$\frac{3}{5} < \frac{12}{15} \quad \frac{2}{8} = \frac{4}{16}$$

$$\frac{2}{3} > \frac{4}{9} \quad \frac{2}{7} < \frac{14}{21}$$

$$\frac{1}{4} = \frac{4}{16} \quad \frac{2}{5} > \frac{6}{20}$$

Draw lines to match the fractions with their equivalent partners:



Order these fractions from smallest to largest:

$$\frac{2}{5} \quad \frac{6}{10} \quad \frac{4}{5} \quad \frac{1}{5} \quad \frac{10}{20}$$

$$\frac{1}{5} \quad \frac{2}{5} \quad \frac{10}{20} \quad \frac{6}{10} \quad \frac{4}{5}$$

$$\frac{2}{4} \quad \frac{9}{16} \quad \frac{5}{8} \quad \frac{1}{4} \quad \frac{3}{8}$$

$$\frac{1}{4} \quad \frac{3}{8} \quad \frac{2}{4} \quad \frac{9}{16} \quad \frac{5}{8}$$

Order these fractions from smallest to largest. You may wish to write the fractions with a common denominator.

1. $\frac{2}{3} \quad \frac{7}{12} \quad \frac{1}{6} \quad \frac{1}{3} \quad \frac{5}{6}$

$$\frac{8}{12} \quad \frac{7}{12} \quad \frac{2}{12} \quad \frac{4}{12} \quad \frac{10}{12}$$

$\frac{1}{6}$	$\frac{1}{3}$	$\frac{7}{12}$	$\frac{2}{3}$	$\frac{5}{6}$
---------------	---------------	----------------	---------------	---------------

Smallest

Largest

2. $\frac{1}{2} \quad \frac{5}{8} \quad \frac{1}{4} \quad \frac{3}{4} \quad \frac{1}{8}$

$$\frac{4}{8} \quad \frac{5}{8} \quad \frac{2}{8} \quad \frac{6}{8} \quad \frac{1}{8}$$

$\frac{1}{8}$	$\frac{1}{4}$	$\frac{1}{2}$	$\frac{5}{8}$	$\frac{3}{4}$
---------------	---------------	---------------	---------------	---------------

Smallest

Largest

3. $\frac{2}{5} \quad \frac{3}{10} \quad \frac{1}{2} \quad \frac{3}{5} \quad \frac{7}{20}$

$$\frac{8}{20} \quad \frac{6}{20} \quad \frac{10}{20} \quad \frac{12}{20} \quad \frac{7}{20}$$

$\frac{3}{10}$	$\frac{7}{20}$	$\frac{2}{5}$	$\frac{1}{2}$	$\frac{3}{5}$
----------------	----------------	---------------	---------------	---------------

Smallest

Largest