

The Disgusting Sandwich



park



badger



peanut butter



sandpit




pond



squirrel




boy



fox



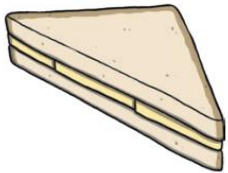
plane



flowerbed



pondweed



sandwich



ant



frog



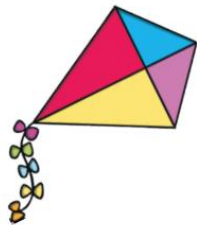
crow




feathers



scooter



kite



ants' nest



slug



playground

How To Make Fruit Pizzas

You will need:


- Digestive biscuits
- Natural yoghurt
- 3 – 4 different types of fruit e.g. Apple, banana, grapes, orange
- Plate
- Spreading knife
- Sharp knife
- A grown up!

What to do:

- First, place your biscuits on the plate.
- Then, spread the yoghurt onto the biscuit.
- Carefully cut up the fruit into small pieces. (Ask a grown up to help you with the sharp knife)
- Finally, put the fruit on top of the yogurt.
- Enjoy!

Top Tip:

Keep the fruit pizzas in the fridge once made.



How To Plant A Sunflower Seed

What you need:

- A small pot
- Soil
- Seeds
- Watering can
- Water



What you do:

- First, fill the pot with soil to just below the top.
- Then, add a little water to the soil.
- Next, carefully put 1 or 2 seeds onto the soil.
- Cover the seeds with a little more soil.
- Gently pour more water onto the soil.



Top Tip:

Water the soil everyday to help your sunflower grow.

Sort the numbers below into odd or even? Add your own numbers to show that you really understand.

(12, 5, 11, 41, 33, 36, 29, 55, 58, 66, 2, 18, 99, 100, 64, 77, 22, 33, 47, 86)

Odd

Even

2 Times Table Activities

Count in 2s and colour in the grid:

1	2	3	4	5
6	7	8	9	10
11	12	13	14	15
16	17	18	19	20
21	22	23	24	25

Work out these answers:

a) $1 \times 2 =$ _____

g) $2 \times 2 =$ _____

b) $3 \times 2 =$ _____

h) $4 \times 2 =$ _____

c) $5 \times 2 =$ _____

i) $6 \times 2 =$ _____

d) $7 \times 2 =$ _____

j) $8 \times 2 =$ _____

e) $9 \times 2 =$ _____


k) $10 \times 2 =$ _____


f) $11 \times 2 =$ _____


l) $12 \times 2 =$ _____

How many ears are there?

a)  _____ \times _____ = _____

b)  _____ \times _____ = _____

c)  _____ \times _____ = _____

d)  _____ \times _____ = _____

Telling the time - o'clock and half past

Write the correct time in the space below each clock.







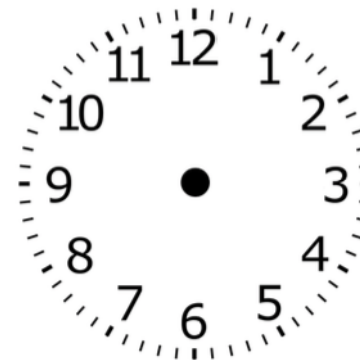





Draw the correct time on the clocks.










Activities





A robot

Similarities	Differences
- _____	- _____
- _____	- _____
- _____	- _____
- _____	- _____

What are the three basic needs that your pet needs to survive?



Next Step



Circle the three things that all living things need to survive.

water

pillow

soap

book

TV

games

school

cloth

air

food

Quiz Time!

What 3 things do humans and animals need to survive?

Is a monkey living or not living?

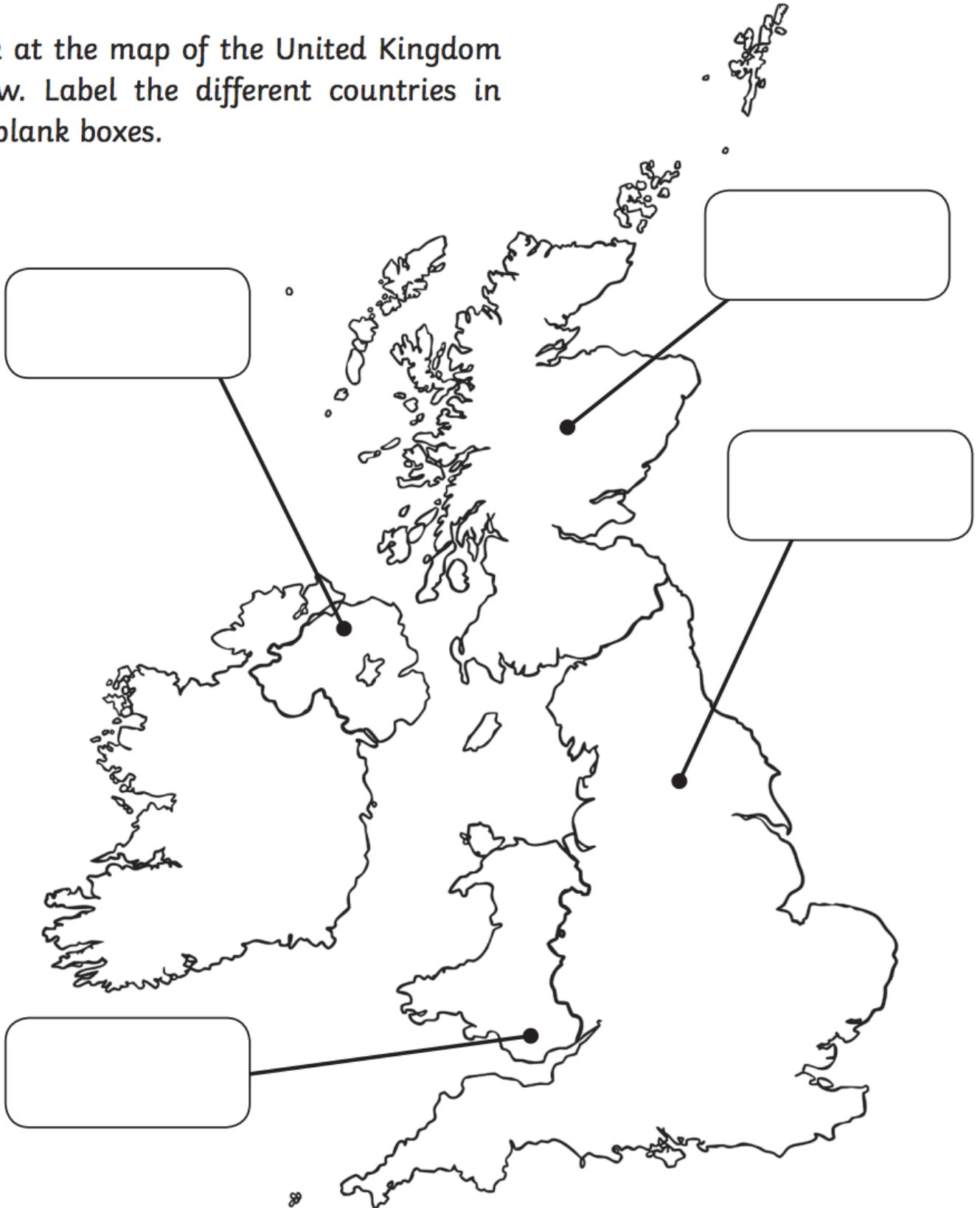
Do humans need sweets to survive?

Does a robot need air to survive?



Countries of the United Kingdom

Look at the map of the United Kingdom below. Label the different countries in the blank boxes.



Challenge:

Use a detailed map or atlas of the United Kingdom to help you locate the capital city of each of the different countries. Label these on your map.

Flags of the United Kingdom


Country _____



Country _____



Country _____



Country _____

